

DIAGRAM BASED -SPECIAL QUESTION PAPER (2016-17)

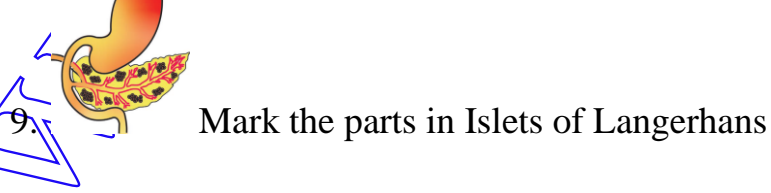
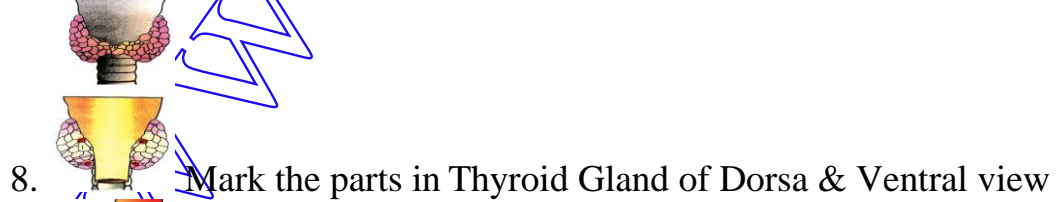


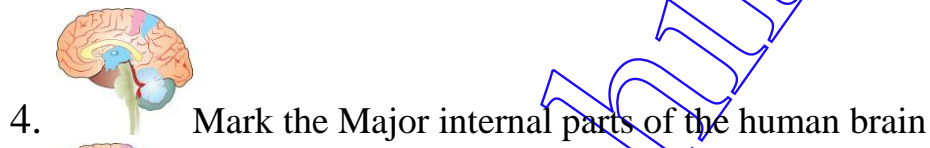
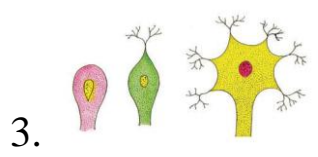
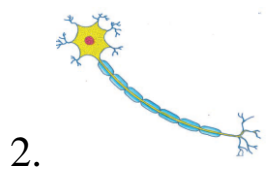
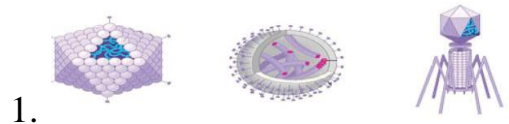
Class: X STD

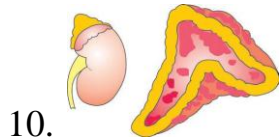
Subject: SCIENCE

MARKS: 100

TIME: 2 Hrs

I.DRAW (any50)THE PARTS OF THE FOLLOWING (50 x 2 =100)






10. Mark the parts in Adrenal gland



11. Mark the parts of Bryophyllum



12. Mark the parts of Androecium



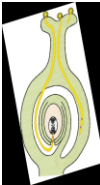
13. Label the Parts of a Flower



14. Label the Parts of Gynoecium



15. Label the Parts in Germination of Pollen grain



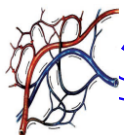
16. Label the Parts in the given diagram



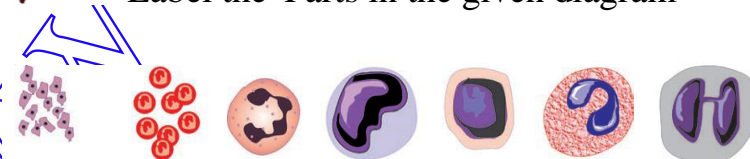
17. Marks the parts both seeds




18. Marks the parts in the given Human Heart.

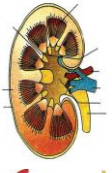



19. Label the Parts in the given diagram





20. Identify the blood cells

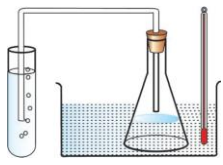
21.  Marks the parts in Excretory System of Man

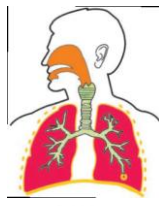
22.  Marks the parts in LS of Kidney

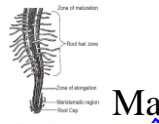
23.  Marks the parts in Nephron

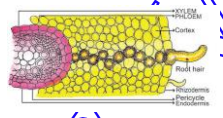
24.  Label the animals Basic pattern of forelimbs of vertebrates

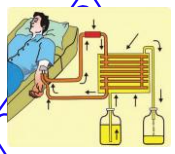
25.  Marks the parts in Human Digestive System


26.  Label the Parts in the given diagram

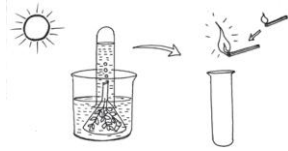
27.  Marks the parts in Human Respiratory System

28.  Marks the parts in Root hair region

29.  Marks the parts in Path of water across the root

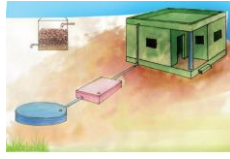
30.  Label the Parts in the given diagram

31.  Label the Parts in the given diagram



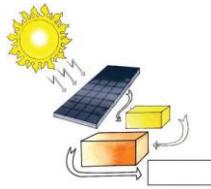
32.

Label the Parts in the given diagram



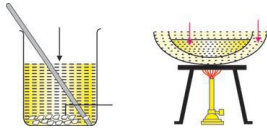
33.

Label the Parts in Rain water harvesting



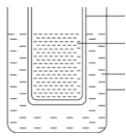
34.

Label the Parts in the given diagram




35.

Label the Parts in the given diagram



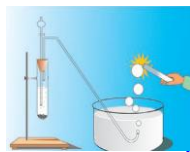
36.

Label the Parts in the given diagram



37.

Label the Parts in the given diagram



38.

Label the Parts in the given diagram



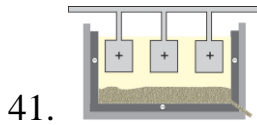
39.

Label the Parts in the given diagram

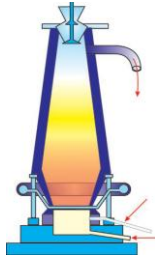


40.


Label the Parts in the given diagram



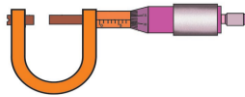
41. Label the Parts in the given diagram



42. Label the Parts in the given diagram

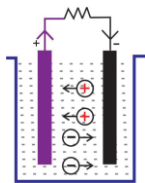


43. Mark the parts in the given diagram

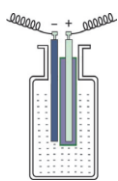


44. Label the parts in screw gauge

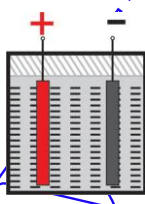
45. Write the components of , , , , or , , or , , ,



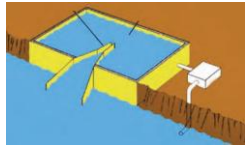
46. Mark the parts in the given diagram



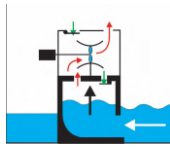
47. Mark the parts in the given diagram



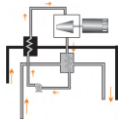
48. Mark the parts in the given diagram



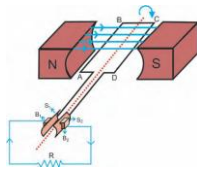
49. Mark the parts in the given diagram



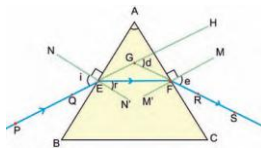
50. Mark the parts in the given diagram



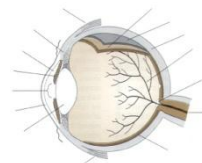
51. Mark the parts in the given diagram



52. Mark the parts in D.C.generator



53. Mark the parts in Refraction of Light through a Prism



54. Mark the parts in the given Human Eye

- PREPARED FOR THE BETTERMENT OF ALL CHILDREN

T.S.SARAVANAN S/O P.SIVABALAN

B.Sc(Chem),B.Ed.,M.A(Eng.Lit),M.Phil(Eng.Lit),B.A(His),

KARUMALAIKODAL

METTUR DAM (R.S),SALEM (D.T), - 636402

EMAIL: sharavananvepp@gmail.com

For conversation: [8675509227](tel:8675509227),[9042331256](tel:9042331256)

